
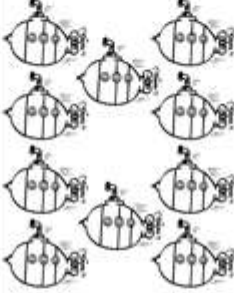



"I can count to 10!" Write the missing numeral.

1, 2, __, 4, 5, __, 7, 8, __, 10

Count the number of objects in each box and circle that number.

		
8 6 9	10 6 7	9 7 10

Draw 10 fish in the fish bowl.

